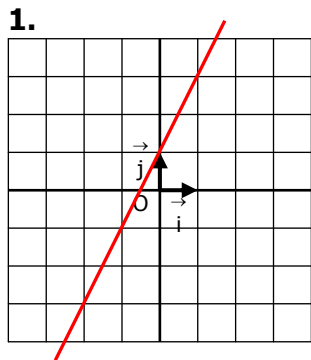
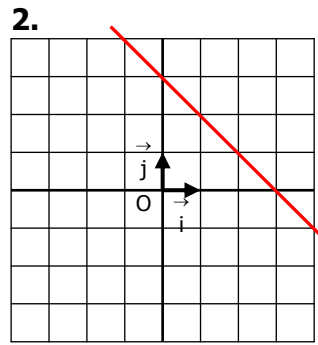


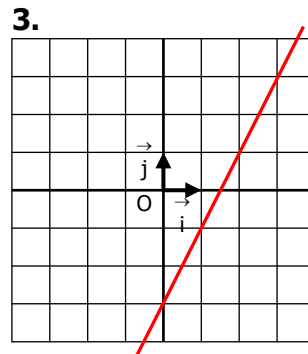
CORRIGE



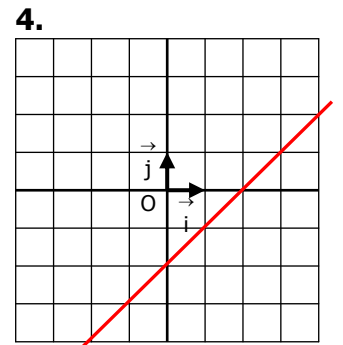
$$f(x) = 2x + 1$$



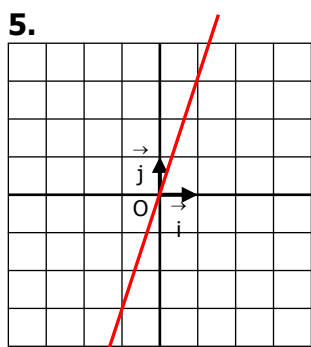
$$f(x) = -x + 3$$



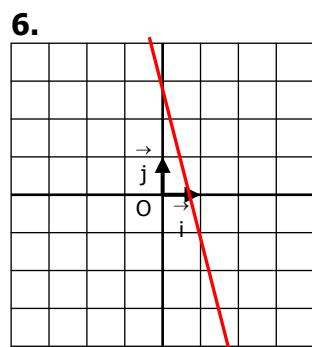
$$f(x) = 2x - 3$$



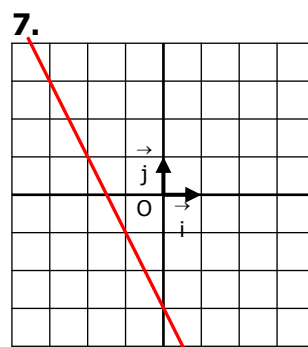
$$f(x) = x - 2$$



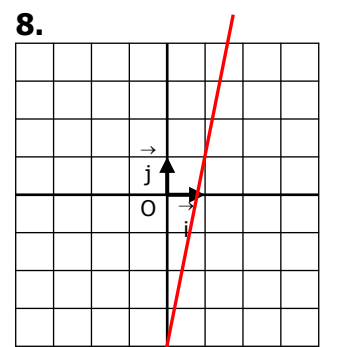
$$f(x) = 3x$$



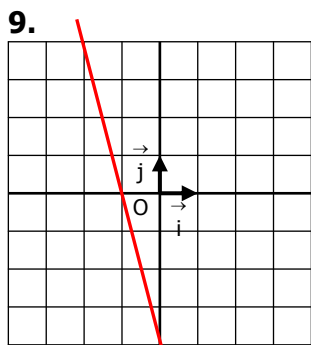
$$f(x) = -4x + 3$$



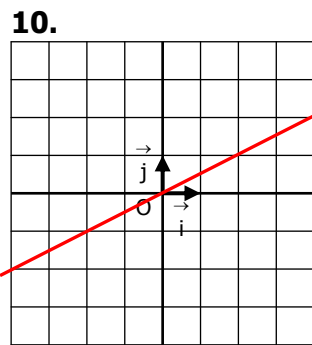
$$f(x) = -2x - 3$$



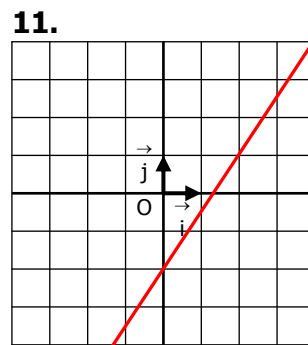
$$f(x) = 5x - 4$$



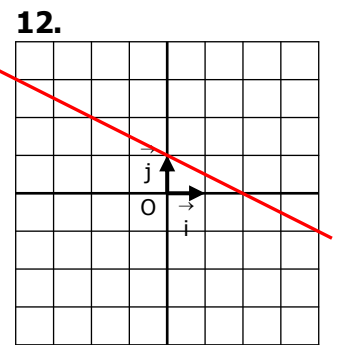
$$f(x) = -4x - 4$$



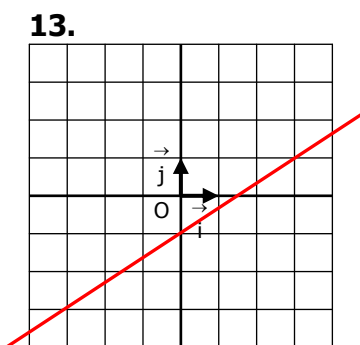
$$f(x) = \frac{1}{2}x$$



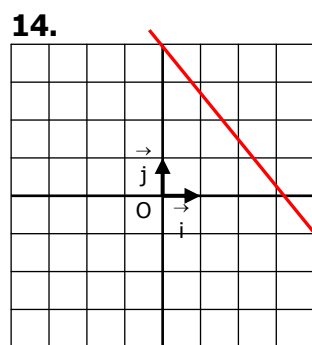
$$f(x) = \frac{3}{2}x - 2$$



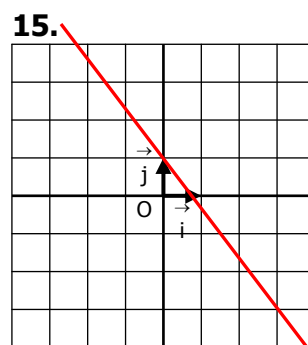
$$f(x) = -\frac{1}{2}x + 1$$



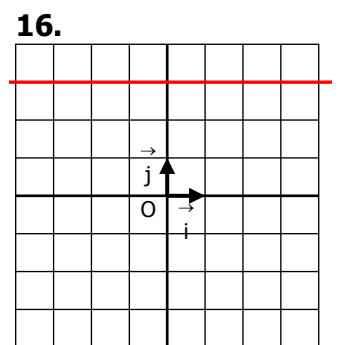
$$f(x) = \frac{2}{3}x - 1$$



$$f(x) = -\frac{5}{4}x + 4$$



$$f(x) = -\frac{4}{3}x + 1$$



$$f(x) = 3$$