


EXERCICE 1

Calculer le périmètre et l'aire des disques suivants (« R » est le rayon, « d » est le diamètre) :

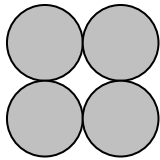
	R	d	Périmètre $P = 2 \pi R$	Aire $A = \pi R^2$
1.	3 cm
2.	10 cm
3.	5 cm
4.	2 m
5.	3 km

EXERCICE 2

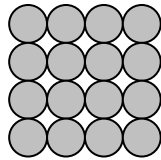
Parmi les figures suivantes, quelle est celle qui a l'aire la plus grande ?



A = cm²



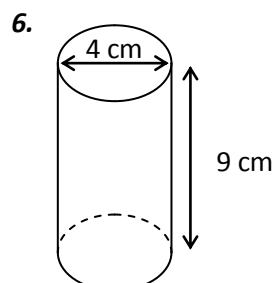
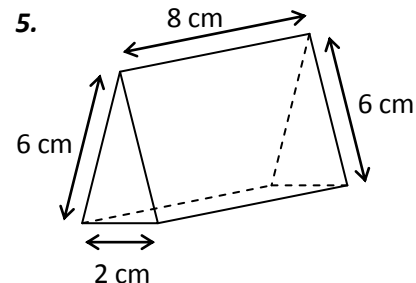
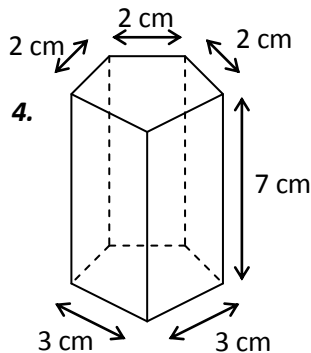
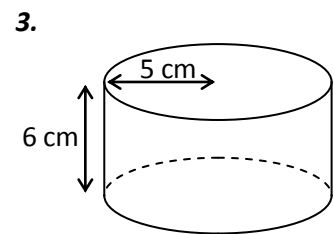
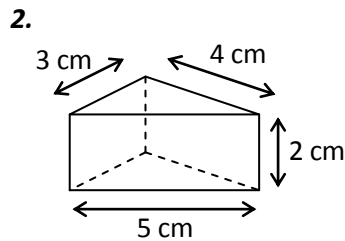
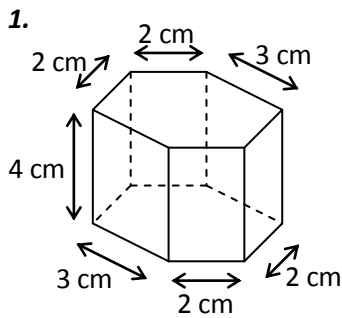
A = cm²



A = cm²

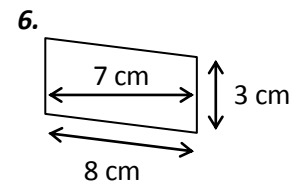
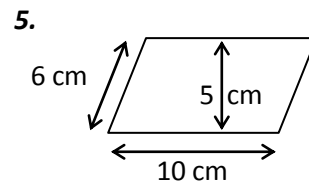
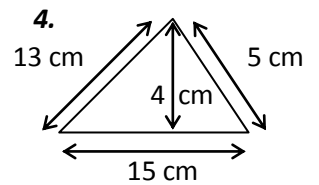
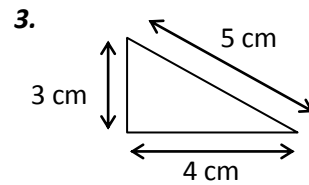
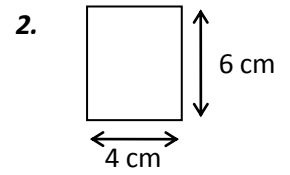
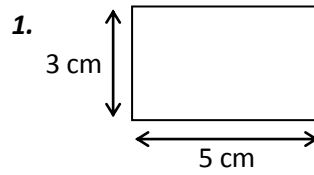
EXERCICE 3

Calculer l'aire latérale de ces solides :



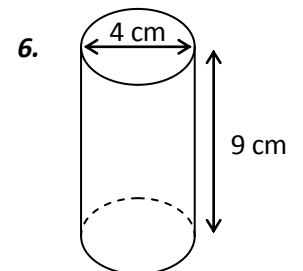
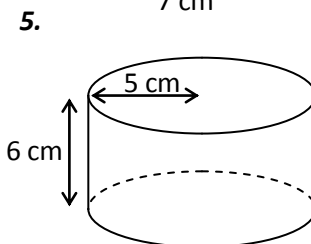
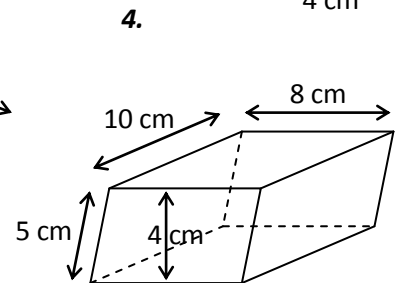
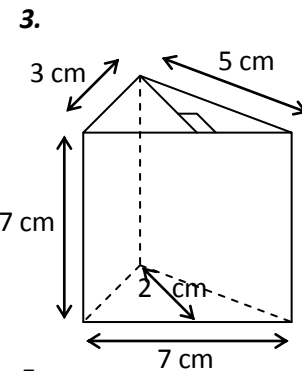
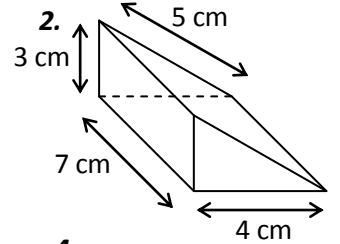
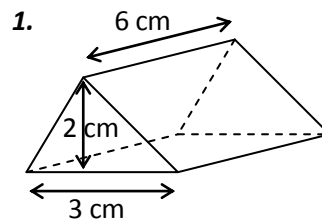
EXERCICE 4

Calculer l'aire des figures suivantes :



EXERCICE 5

Calculer le volume de ces solides :



EXERCICE 6

Calculer le volume de cette maison :

